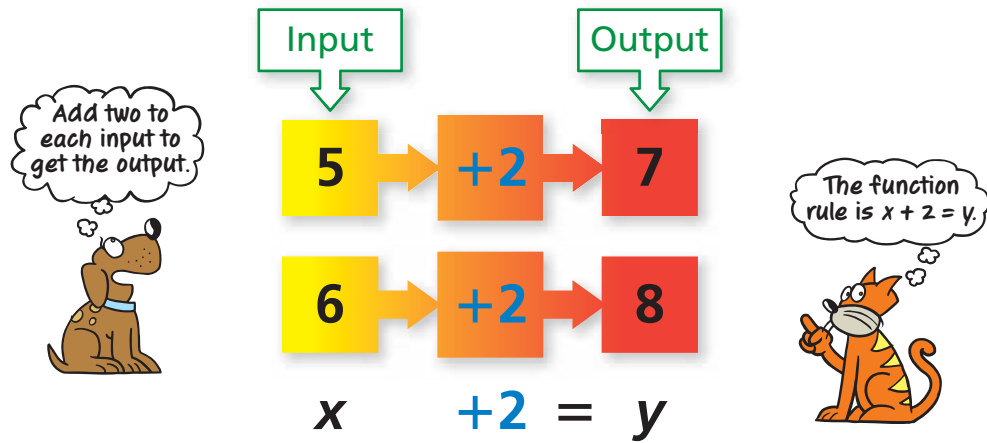


# Function Rules

Name \_\_\_\_\_

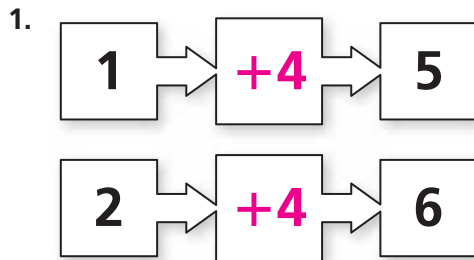
## Key Concept and Vocabulary



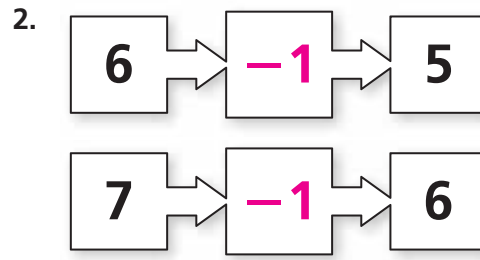
## PRACTICE MAKES PURR-FECT™

Check your answers at [BigIdeasMath.com](http://BigIdeasMath.com).


Identify the function rule.



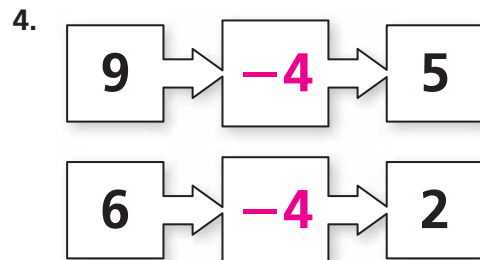
The function rule is  $x + 4 = y$ .



The function rule is  $x - 1 = y$ .



The function rule is  $x + 5 = y$ .



The function rule is  $x - 4 = y$ .