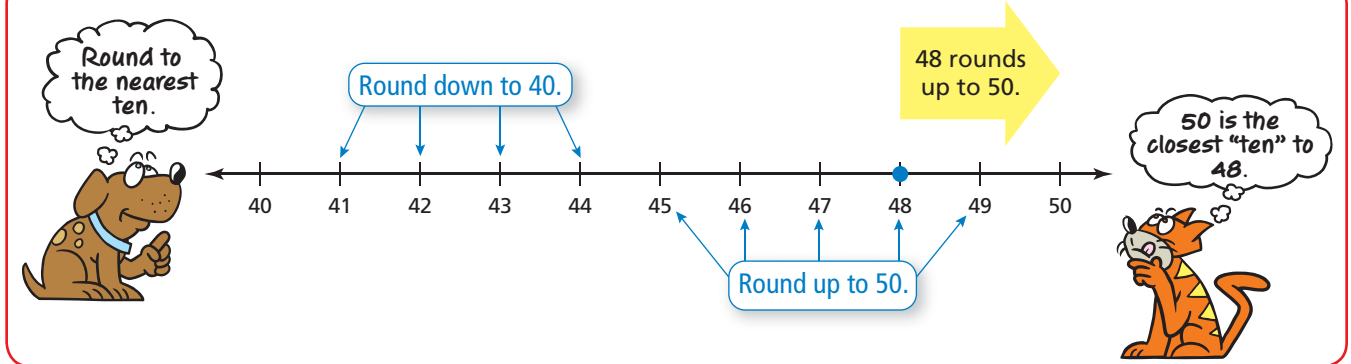


Rounding Numbers

Name _____

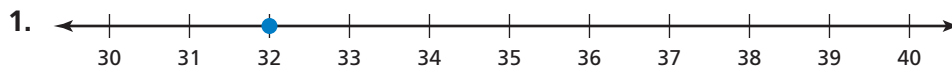
Key Concept and Vocabulary



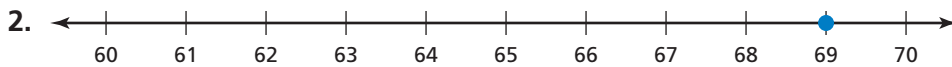
PRACTICE MAKES *PURR-FECT*™

Check your answers at BigIdeasMath.com.

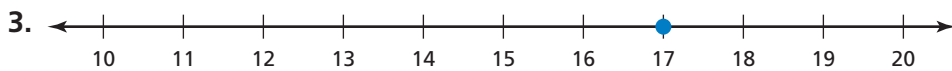
Circle the closest "ten." Then write the answer in .



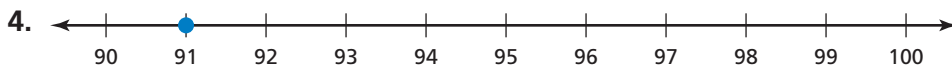
32 rounds to .



69 rounds to .



17 rounds to .



91 rounds to .

Count the money. Circle the better statement.



The total is about 40¢.

The total is about 30¢.



The total is about 40¢.

The total is about 30¢.

7. **BIOLOGY** You are counting trout in a stream. To the *nearest ten*, trout about how many are there?

