
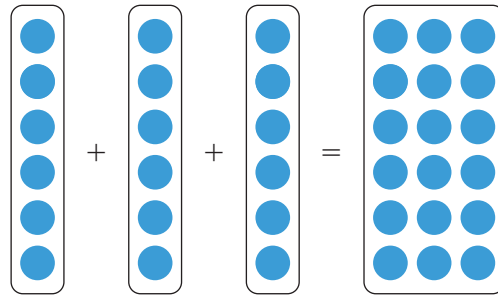
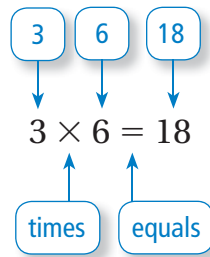


# Multiplying

Name \_\_\_\_\_

## Key Concept and Vocabulary



## PRACTICE MAKES PURR-FECT™

Check your answers at [BigIdeasMath.com](http://BigIdeasMath.com).

Draw the correct number of ●. Write the answer in .

1.  +  +  +  =  $4 \times 3 =$

2. + + + + =   $5 \times 2 =$

Write the problem in .

3.   $\times$   =   $5 \times 3 =$

4.   $\times$   =   $2 \times 4 =$

5. **TEXT MESSAGES** Each cell phone has four text messages. Find the total number of text messages.

text messages

