

Comparing Decimals

Name _____

Key Concept and Vocabulary

A number line helps compare decimals.

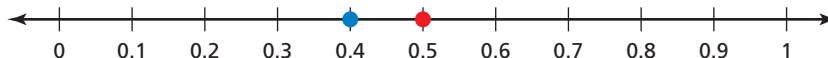


0.4 is less than 0.5.

$$0.4 < 0.5$$

0.5 is greater than 0.4.

$$0.5 > 0.4$$



0.4 is to the left of 0.5. So, it is less.

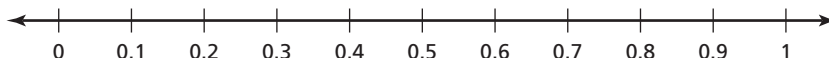


PRACTICE MAKES PURR-FECT™

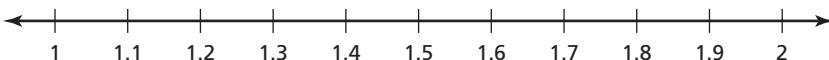
Check your answers at BigIdeasMath.com.

Draw a ● for each decimal. Then write “<” or “>” in .

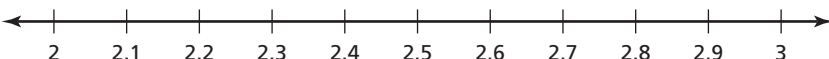
1. 0.3 0.2



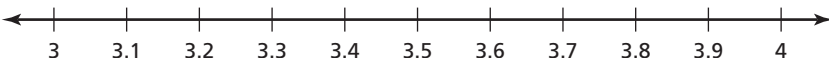
2. 1.7 1.8



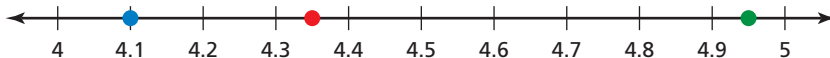
3. 2.35 2.4



4. 3.7 3.55



5. Write the decimals that are shown on the number line.



- =
- =
- =

6. **APPLES AND ORANGES** Which weighs more, the apples or the oranges? Circle the correct answer.

Apples weigh more.

Oranges weigh more.

