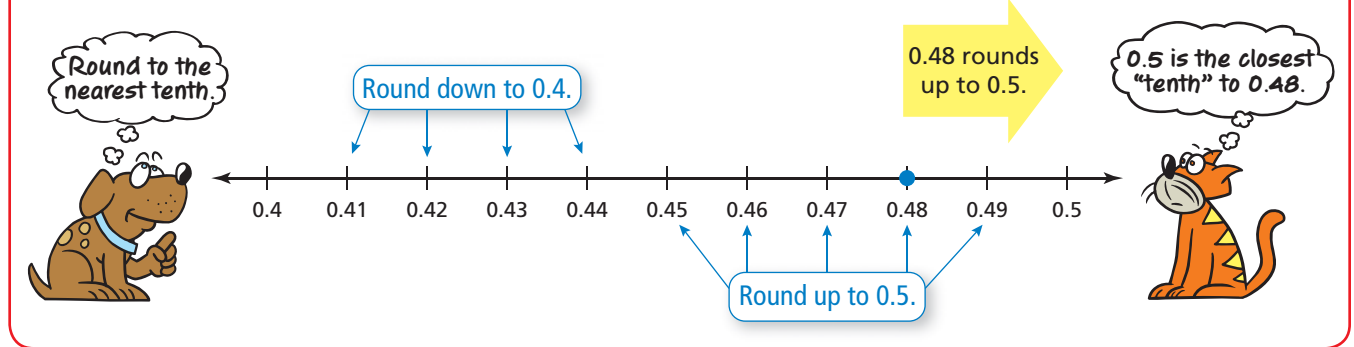


Rounding Decimals

Name _____

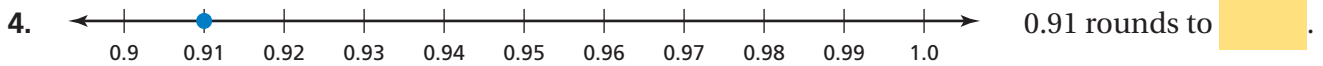
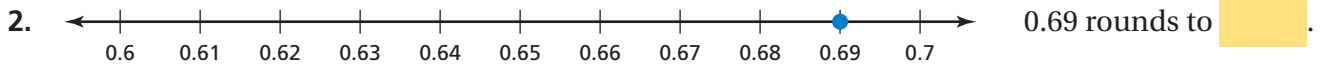
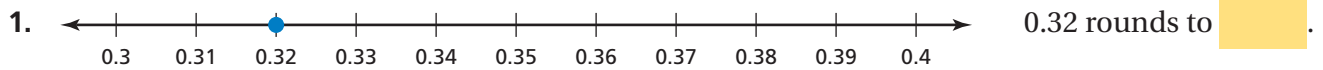
Key Concept and Vocabulary



PRACTICE MAKES PURR-FECT™

Check your answers at BigIdeasMath.com.

Circle the closest "tenth." Then write the answer in .



Count the money. Circle the better statement.



The total is about \$0.40.

The total is about \$0.30.



The total is about \$0.40.

The total is about \$0.30.

7. **COINS** Draw lines to match the coin to the closest price.



\$0.08

\$0.49

\$0.02

\$0.04

\$0.27