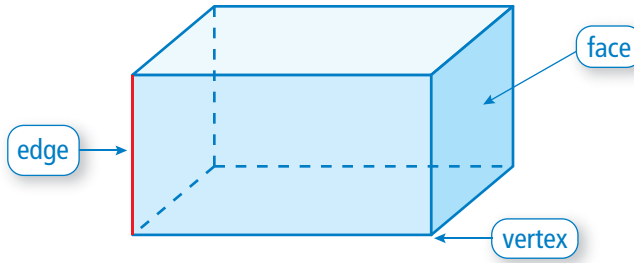


Faces, Edges, and Vertices

Name _____

Key Concept and Vocabulary

This is a rectangular prism.



The plural of "vertex" is "vertices."

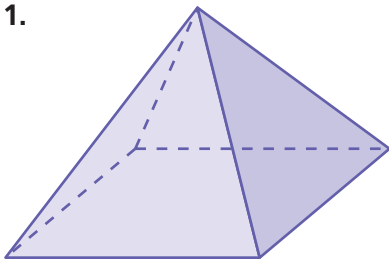


PRACTICE MAKES PURR-FECT™

Check your answers at BigIdeasMath.com.

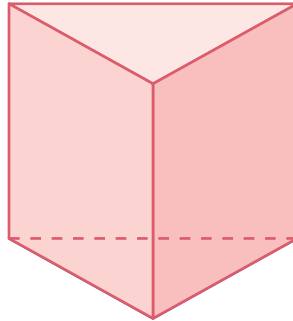
Write the number of faces, edges, and vertices.

1.



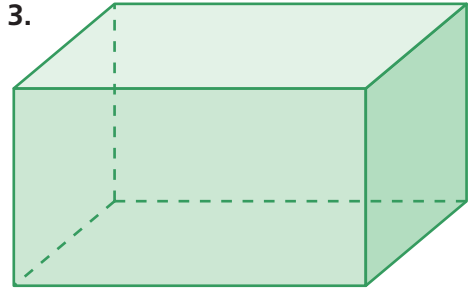
Faces =
Edges =
Vertices =

2.



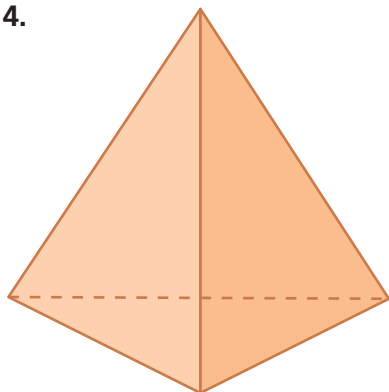
Faces =
Edges =
Vertices =

3.



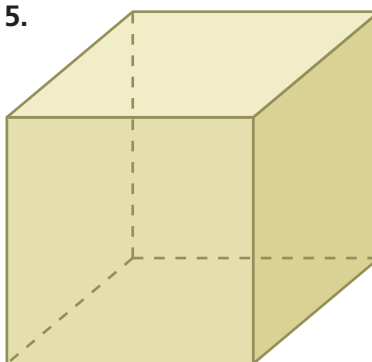
Faces =
Edges =
Vertices =

4.



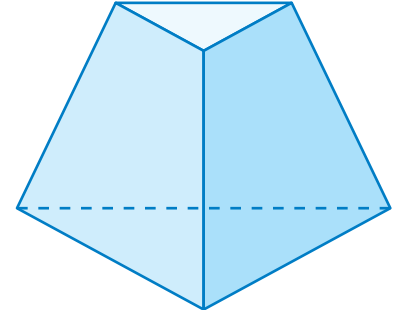
Faces =
Edges =
Vertices =

5.



Faces =
Edges =
Vertices =

6.



Faces =
Edges =
Vertices =